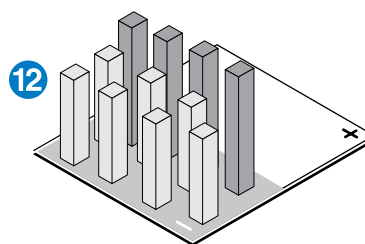
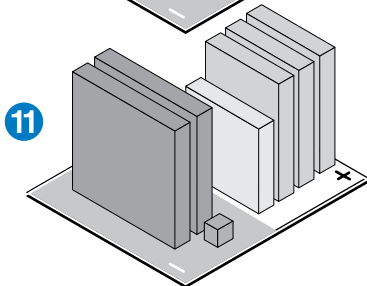
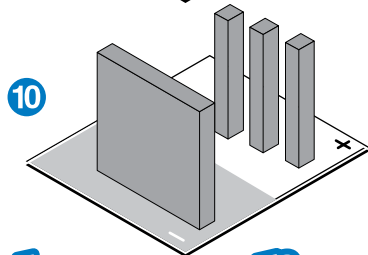
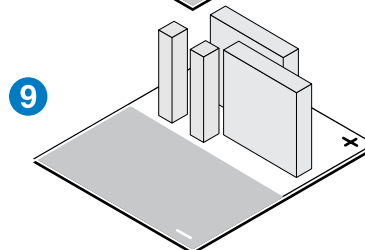
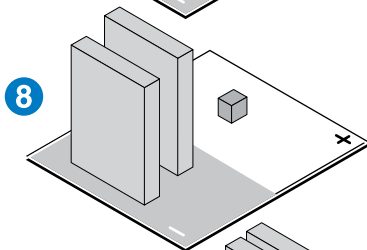
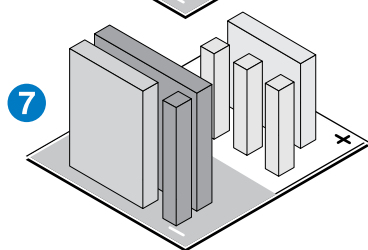
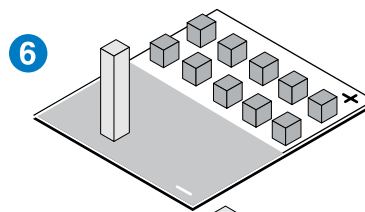
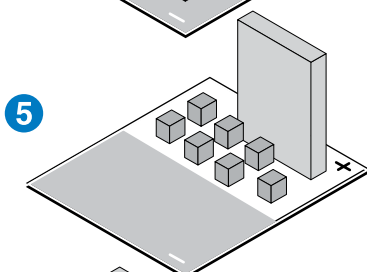
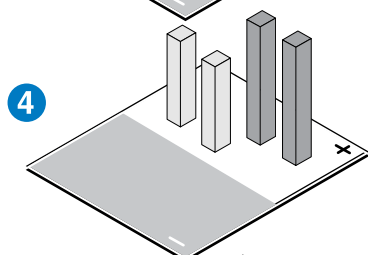
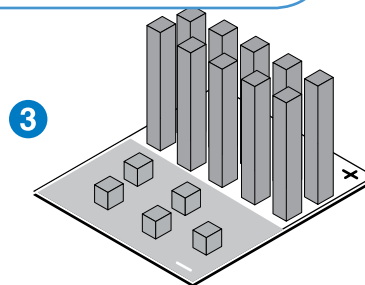
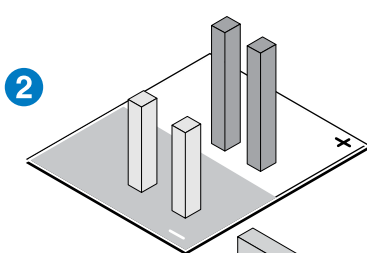
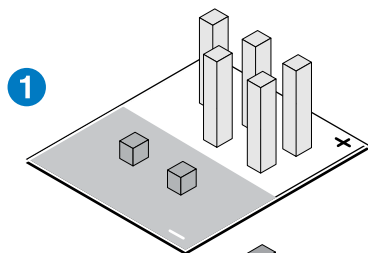
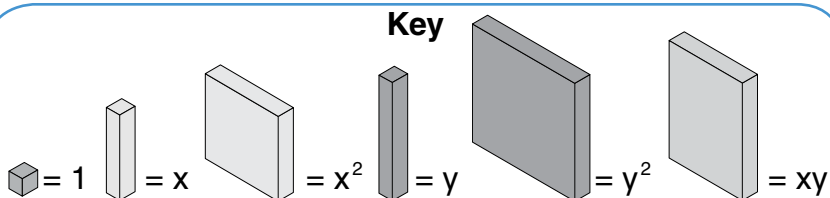


Look Out! Negative Variables Below!

Find the expression that describes each model.



Answer Box

| | | | | | |
|----------------|-----------------------------|-------------------|--------------------|--------------------------------|------------------|
| A $10y - 5$ | B $2x^2 + 2x$ | C $(-2x) + 2y$ | D $10 - x$ | E $2x + 2y$ | F $5x + (-2)$ |
| G $7 + xy$ | H $3xy - 2y^2 + x^2 - 1$ | I $1 - 2xy$ | J $-4y + (-7x)$ | K $x^2 - y^2 + 3x - y - xy$ | L $3y - y^2$ |

